
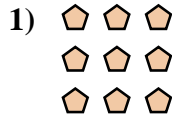




Write each array as an addition problem and solve.



Answers

Ex. 3+3+3+3=12

1. _____

2. _____

3. _____

4. _____

5. _____

6. _____

7. _____

8. _____

9. _____

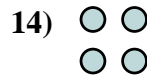
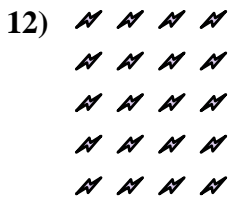
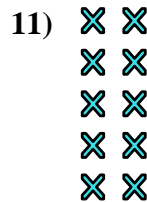

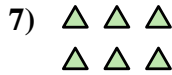

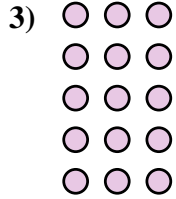
10. _____

11. _____

12. _____


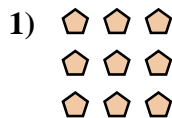

13. _____

14. _____





Write each array as an addition problem and solve.



Answers

Ex. 3+3+3+3=12

1. 3+3+3=9

2. 4+4+4=12

3. 3+3+3+3+3=15

4. 4+4=8

5. 5+5+5=15

6. 2+2+2=6

7. 3+3=6

8. 4+4+4+4=16

9. 5+5+5+5+5=25

10. 2+2+2+2=8

11. 2+2+2+2+2=10

12. 4+4+4+4+4=20

13. 5+5=10

14. 2+2=4

